

KINGS SCHOOLS -KABOWA
P. 2 End of Term I Examination, 2020
Literacy II

Name: _____

SECTION A (2 marks each)

1. Give one use of legs to people.

2. Mention one source of water in a community.

3. Write down one health giving food.

4. Mention the type of weather when an umbrella is useful.

5. Give any one thing that makes our school different from other schools.


6. State one way a child is useful in a home.

7. Name the place where doctors work.

8. Give the material used to make pots.

9. Which part of a house is built using bricks?

Use the diagram to answer question 10.



10. Name the means of transport shown in the picture above.

11. What is personal hygiene?

12. Draw a picture of a basket in the space below.



13. Write down one activity children do at school.

14. Give one way first aid is useful to an injured person.

15. Mention the use of a dog in a home.

16. State one cause of diseases in people.

17. Underline the different word.

school gate, school motto , school badge

18. Which tool do the farmers use to dig in the garden?

19. Give one importance of a school assembly to a P. 2 child.

20. Name the part of a plant shown below.



SECTION B (1 mark each)

21(a) Mention two items people get from a cow.

(i) _____ (ii) _____

(b) How are horns useful to a cow?

(c) Give one way people care for their cows.

22(a) Name two things we use to keep our bodies clean.

(i) _____ (ii) _____

(b) Give one way of keeping our bodies clean.

(c) Mention any one danger of a dirty body.

23(a) Name the people who do the following activities in a school:

(i) Protecting children from bad people: _____

(ii) Treating sick children: _____

(b) Name one material teachers use to do their work.

(c) Mention one need of a school.


24(a) Give one example of a plant found in our environment.

(b) Mention one importance of plants to people.

(c) Write down one way people damage their environment.

(d) State one way people care for plants in their environment.

25. **Use the diagram to answer the following questions.**



(a) Name the place shown in the diagram above.

(b) How is the place above useful to people?

(c) Give the group of people in a community who use the place above. _____

(d) State one way a market benefits people.

26. Mention two diseases that attack people.

(i) _____ (ii) _____

(b) Give one way diseases are spread in people.

(c) Write down one way of preventing diseases in people.

27. **Match these correctly.**

teeth

reading books

hand

walking from place to place

legs

chewing food

eyes

washing clothes

28(a) What do we call the condition of a place at a given time?

(b) Give one element of weather that helps plants to grow well.

(c) Mention one way sunny weather is useful to people.

(d) How is windy weather dangerous to people?

29(a) Name the quickest type of transport.

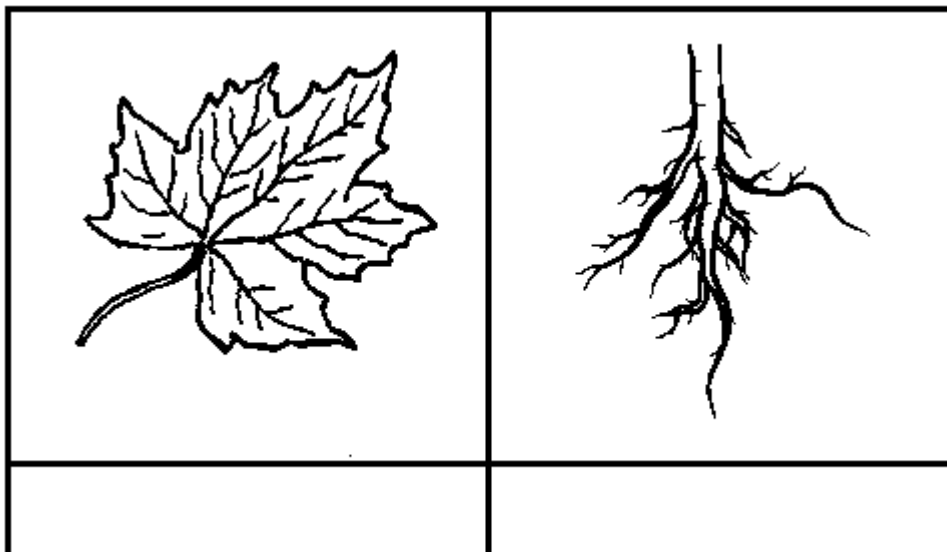
(b) Name one animal people use for transport.

(c) What means of road transport is suitable for:

(i) carrying many people: _____

(ii) carrying many bags of sugar: _____

30(a) Name the parts of a plant shown below.



(b) Give one way plant stems are useful to people.

(c) Name any one example of plant seeds people eat.

31(a) Give two examples of the basic needs.

(i) _____ (ii) _____

(b) Mention one source of food to people.

(c) Give one reason why some people fail to get food.

32(a) Draw the pictures of these needs of a school.

books	chairs

(b) How is a wall clock useful in a classroom?

(c) Mention one play material used in a P. E lesson at your school.

33(a) Give two types of food you know.

(i) _____

(ii) _____

(b) Write down one use of food to people.

(c) Circle the odd man out.

cassava, rice , fish , yams

34. **Write “True” or “False” to fill the gaps.**


(a) Wild animals live at home. _____

(b) Mosquitoes spread malaria. _____

(c) We use water for drinking. _____

(d) We use a comb to clean out teeth. _____

35(a) Name these things that cause accidents.



(b) Give one result of accidents to people.

(c) Mention one way of preventing accidents.
